

C

ಒಟ್ಟು ಮುದ್ರಿತ ಪುಟಗಳ ಸಂಖ್ಯೆ : 16]

Total No. of Printed Pages : 16]

ಒಟ್ಟು ಪ್ರಶ್ನೆಗಳ ಸಂಖ್ಯೆ : 48]

Total No. of Questions : 48]

ಸಂಕೇತ ಸಂಖ್ಯೆ : **83-E**

Code No. : **83-E**

**CCE PR
NSR & NSPR**

Question Paper Serial No. **100**

ವಿಷಯ : ವಿಜ್ಞಾನ

Subject : SCIENCE

(ಭೌತ ವಿಜ್ಞಾನ, ರಸಾಯನ ವಿಜ್ಞಾನ ಮತ್ತು ಜೀವ ವಿಜ್ಞಾನ / **Physics, Chemistry & Biology**)

(ಇಂಗ್ಲಿಷ್ ಮಾಧ್ಯಮ / **English Medium**)

(ಪುನರಾವರ್ತಿತ ಖಾಸಗಿ ಅಭ್ಯರ್ಥಿ / ಎನ್.ಎಸ್.ಆರ್. & ಎನ್.ಎಸ್.ಪಿ.ಆರ್.)

(**Private Repeater / NSR & NSPR**)

ದಿನಾಂಕ : 27. 06. 2022]

[Date : 27. 06. 2022

ಸಮಯ : ಬೆಳಿಗ್ಗೆ 10-30 ರಿಂದ ಮಧ್ಯಾಹ್ನ-1-45 ರವರೆಗೆ] [Time : 10-30 A.M. to 1-45 P.M.

ಗರಿಷ್ಠ ಅಂಕಗಳು : 100]

[Max. Marks : 100

General Instructions to the Candidate :

1. There are *three* parts in the question paper :
Part A : Physics, Part B : Chemistry, Part C : Biology.
2. This question paper consists of 48 objective and subjective types of questions.
3. This question paper has been sealed by reverse jacket. You have to cut on the right side to open the paper at the time of commencement of the examination. Check whether all the pages of the question paper are intact.
4. Follow the instructions given against both the objective and subjective types of questions.
5. Figures in the right hand margin indicate maximum marks for the questions.
6. The maximum time to answer the paper is given at the top of the question paper. It includes 15 minutes for reading the question paper.

100



PR/NSR&NSPR-(C)-(100)-5502



[Turn over

ಇಲ್ಲಿಂದ ಕತ್ತರಿಸಿ

TEAR HERE TO OPEN THE QUESTION PAPER


ಪ್ರಶ್ನೆಪತ್ರಿಕೆಯನ್ನು ತೆರೆಯಲು ಇಲ್ಲಿ ಕತ್ತರಿಸಿ

Tear here




PART - A
(PHYSICS)



- I. **Four alternatives are given for each of the following questions / incomplete statements. Choose the correct alternative and write the complete answer along with its letter of alphabet.**  **2 × 1 = 2**




1. The correct statement among the following related to the concave


lens is 


(A) converges the light rays 

(B) diverges the light rays

(C) forms inverted image 

(D) forms real image.

2. The SI unit of resistivity is 

(A) ohm 

(B) volt

(C) watt 

(D) ohm-metre.



**II. Answer the following questions :****3 × 1 = 3**

3. Calculate the power of convex lens with a focal length of + 0.5 m.
4. What are the reasons for occurring overload in an electric circuit ?
5. What is a solar cell ?

**III. Answer the following questions :****6 × 2 = 12**

6. An electric bulb with a resistance of 50Ω is connected to 10 V battery in an electric circuit. Calculate the electric current flowing through the electric bulb and electric power of the bulb.
7. Draw the diagram of a simple electric motor and label 'Split rings'.
8. Write any two limitations of producing electricity from wind energy.
9. State Fleming's right hand rule.
10. Draw the diagram showing the connection of three resistors in parallel in an electric circuit and label 'voltmeter'.
11. Write any two differences between convex mirror and concave mirror.





IV. Answer the following questions :

 $3 \times 3 = 9$

12. a) State the two laws of refraction of light.



b) "The refractive index of diamond is 2.42." Write the meaning of this statement.



13. Draw the ray diagram of image formation when the object is kept at $2F_1$ of the convex lens. With the help of the ray diagram, mention the position and nature of the image formed.



[F_1 : Principal focus of the lens]



OR



Draw the ray diagram of image formation when the object is kept between C and F of the concave mirror. With the help of the ray diagram mention the position and the nature of the image formed.



[F : Principal focus of the mirror, C : Centre of curvature of mirror]





14. List the properties of the magnetic field due to the flow of electric current in a solenoid. What are the two methods of increasing magnetic field in a solenoid ?



V. Answer the following questions :



2 × 4 = 8

15. a) Write any four uses of concave mirror.



b) An object is placed at a distance of 15 cm on the principal axis in front of a concave lens with a focal length of 10 cm. Find the image distance.



16. a) State Joule’s law of heating. Name any two devices that work on the application of this law.



b) Why are the alloys like nichrome used in electrical heating devices ?



OR



a) State Ohm’s law. In domestic electric circuit electrical appliances are not connected in series. Why ?



b) Write the factors on which resistance of a conductor depends.





PART - B
(CHEMISTRY)



VI. Four alternatives are given for each of the following questions / incomplete statements. Choose the correct alternative and write the complete answer along with its letter of alphabet.

**2 × 1 = 2**

17. The metal that displaces copper from copper sulphate solution is

(A) mercury

(B) gold



(C) iron

(D) silver

18. Number of single bonds found in the molecular structure of propanal

is



(A) 8

(B) 6



(C) 7

(D) 5

VII. Answer the following question :

**1 × 1 = 1**

19. State the modern periodic law.





VIII. Answer the following questions :



5 × 2 = 10

20. Draw the diagram of the arrangement of apparatus used to show the electrolysis of water and label the 'graphite rod'.



21. The chemical reaction that takes place between sodium sulphate and barium chloride is called double displacement reaction. Why ? Write the balanced chemical equation for this reaction.

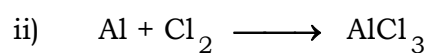
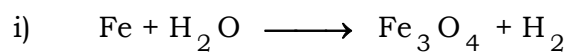


OR

What is the type of chemical reaction in which quicklime is obtained by lime stone (calcium carbonate) ? Write a chemical equation for this reaction.



22. Balance the following chemical equations :



23. Write any two uses of bleaching powder.

24. Write any two differences between the physical properties of metals and non-metals.





IX. Answer the following questions :

 $3 \times 3 = 9$

25. Draw the diagram of arrangement of the apparatus to show the reaction of zinc granules with dilute sulphuric acid and testing hydrogen gas by burning. Label the following parts :



i) Zinc granules



ii) Soap solution.

26. a) What is neutralisation reaction ? Give an example.



b) What is the common name of the compound that has molecular formula $\text{CaSO}_4 \cdot \frac{1}{2} \text{H}_2\text{O}$?



27. Write the two reasons for placing oxygen and sulphur in a same group of modern periodic table. Which one of these elements has larger atomic size and why ?



[Atomic number of oxygen = 8, Atomic number of sulphur = 16]



OR



Write the limitations of Mendeleev's periodic table. Why is silicon called metalloid ?



**X. Answer the following question :****1 × 4 = 4**

28. a) Write any two differences between saturated and unsaturated carbon compounds.



b) Write the structural formula of the following carbon compounds :



i) Benzene



ii) Butane

**XI. Answer the following question :****1 × 5 = 5**

29. a) Explain the formation of ionic bond between sodium atom and chlorine atom. [Atomic number of sodium is 11, Atomic number of chlorine is 17]



b) List any four general properties of ionic compounds.





PART - C
(BIOLOGY)




XII. Four alternatives are given for each of the following questions / incomplete statements. Choose the correct alternative and write the complete answer along with its letter of alphabet.



4 × 1 = 4



30. In plants the major function of xylem is the transportation of



(A) water



(B) food



(C) amino acids



(D) oxygen.

31. An example for positive geotropism in plants is



(A) growth of shoot



(B) growth of roots into deep soil

(C) growth of tendrils of creepers

(D) upward growth of roots.





32. Primary consumers in any food chain are always



(A) carnivores




(B) herbivores



(C) higher carnivores

(D) producers.



33. Part of a flower in the plant that develops into fruit is



(A) petal



(B) stigma

(C) ovary

(D) style.



XIII. Answer the following questions :



4 × 1 = 4

34. Which hormone inhibits the growth of plants ?



35. What is the sex of a child born by receiving X chromosome from

father ?





36. Nowadays Chlorofluorocarbon (CFC) free refrigerators are being manufactured. Why ?



37. What is 'biological magnification' ?



XIV. Answer the following questions :



7 × 2 = 14

38. Mention any two effects of non-biodegradable substances on the environment.



OR



Mention any two methods that reduce the problems caused while disposing the wastes.



39. Can the wing of butterfly and the wing of bat be considered as Analogous organs ? If yes, why ? If no, why ?



40. Draw the diagram showing the structure of human excretory system and label 'ureter'.





41. Name the enzyme present in Saliva. What is the function of this enzyme ?



42. Name the mineral required for the production of thyroxine hormone. What are the functions of this hormone ?



43. Draw the diagram of longitudinal section of a flower and label 'stigma'.



44. "The flow of energy is unidirectional in an ecosystem." How ? Explain.



XV. Answer the following questions :



3 × 3 = 9

45. Explain the stages of 'double circulation' of the blood in humans.



OR





Mention the events that occur during photosynthesis in plants.

What are the methods used by plants to get rid of excretory

products ?



46. How does uterus prepare to receive the fertilized egg in woman ?

What happens if egg does not fertilise ? Explain.



47. "An individual organism cannot pass the experiences acquired

during its life time to the progenies of the next generation." Explain

this concept with the help of an illustration.



OR

Pure 'short' pea plant is crossed with pure 'tall' pea plant. Represent

the results obtained in F_2 generation of monohybrid cross with the



help of checker board and mention the ratio of the types of plants

obtained.





XVI. Answer the following question :



1 × 4 = 4

48. Draw the diagram showing the structure of the human brain and



label the following parts :



i) Cerebellum



ii) Mid-brain.

